
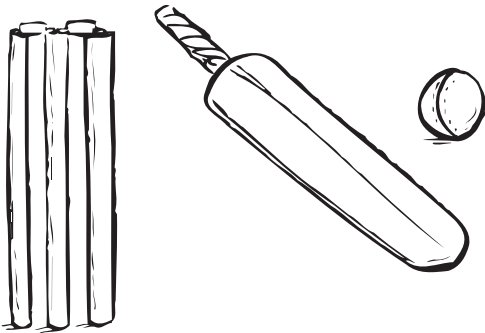


More or less: problems




Emma has 45p. Sam has 10p less than Emma.

How much does Sam have?




Ravi scores 9 runs at cricket. Ollie scores 100 more than Ravi.

How many runs did Ollie score?




Rose cycles 975 metres to school. Brian cycles 100 metres less than Rose.

How far does Brian cycle?



Julian buys 17kg of potatoes. Amma buys 1kg less than Julian.

How many potatoes does Amma buy?



Farmer Jones keeps 286 sheep on his farm. Farmer Williams keeps 100 more than Farmer Jones.

How many sheep does Farmer Williams keep?