



What's the score?


Score for:
Ellie Phant




Score for:
Lance
Prance



Score for:
Lucy
Lightfoot



Score for:
Lee Twinkle-
Toes



What's the score?

Using the **Activity sheet**, 'What's the score?' challenge your children to some numeracy work. Fill in the score cards according to your class' ability and then set them the following questions.

1. What is Judge C's score for Ellie Phant?
2. What is Ellie Phant's total score?
3. What is Lance Prance's total score?
4. What is Lucy Lightfoot's total score?
5. What is Lee Twinkle-Toes' total score?
6. Which dancer has the highest total score?
7. How many marks did Judge A award altogether?
8. Which judge gave the highest mark altogether?
9. Which judge gave the lowest mark altogether?
10. What is Judge A's mark for Ellie Phant minus their mark for Lucy Lightfoot?